

JEE-MAIN EXAM JANUARY, 2024

Date: - 30-01-2024 (SHIFT-1)

CHEMISTRY

SECTION-A

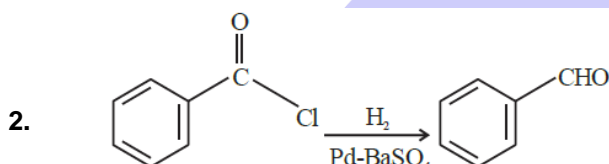
1. Given below are two statements:

Statement-I: The gas liberated on warming a salt with dil H_2SO_4 , turns a piece of paper dipped in lead acetate into black, it is a confirmatory test for sulphide ion.

Statement-II: In statement-I the colour of paper turns black because of formation of lead sulphite.

In the light of the above statements, choose the most appropriate answer from the options given below:

- (1) Both Statement-I and Statement-II are false
- (2) Statement-I is false but Statement-II is true
- (3) Statement-I is true but Statement-II is false
- (4) Both Statement-I and Statement-II are true.



This reduction reaction is known as:

- (1) Rosenmund reduction
 - (2) Wolff-Kishner reduction
 - (3) Stephen reduction
 - (4) Etard reduction
3. Sugar which does not give reddish brown precipitate with Fehling's reagent is:
- (1) Sucrose
 - (2) Lactose
 - (3) Glucose
 - (4) Maltose
4. Given below are the two statements: one is labeled as Assertion (A) and the other is labeled as Reason (R).

Assertion (A): There is a considerable increase in covalent radius from N to P. However from As to Bi only a small increase in covalent radius is observed.

Reason (R): covalent and ionic radii in a particular oxidation state increases down the group.

In the light of the above statement, choose the most appropriate answer from the options given below:

- (1) (A) is false but (R) is true
 - (2) Both (A) and (R) are true but (R) is not the correct explanation of (A)
 - (3) (A) is true but (R) is false
 - (4) Both (A) and (R) are true and (R) is the correct explanation of (A)
5. Which of the following molecule/species is most stable?



6. Diamagnetic Lanthanoid ions are:
 (1) Nd^{3+} and Eu^{3+} (2) La^{3+} and Ce^{4+} (3) Nd^{3+} and Ce^{4+} (4) Lu^{3+} and Eu^{3+}
7. Aluminium chloride in acidified aqueous solution forms an ion having geometry
 (1) Octahedral (2) Square Planar
 (3) Tetrahedral (4) Trigonal bipyramidal

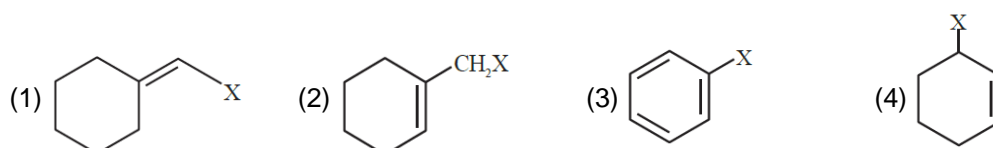
8. Given below are two statements:

Statement-I : The orbitals having same energy are called as degenerate orbitals.

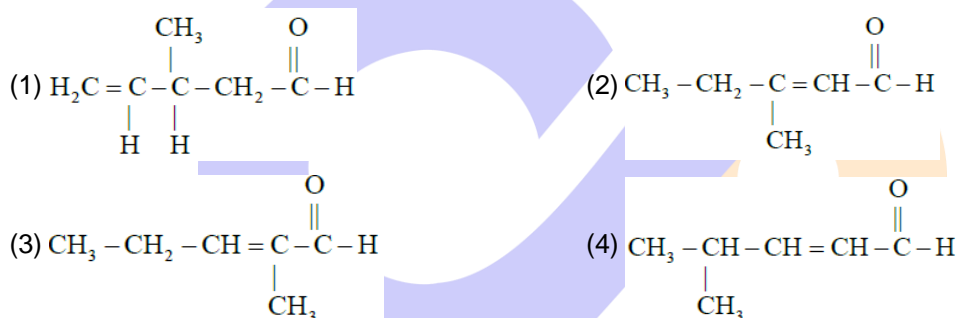
Statement-II : In hydrogen atom, 3p and 3d orbitals are not degenerate orbitals.

In the light of the above statements, choose the most appropriate answer from the options given

- (1) Statement-I is true but Statement-II is false (2) Both Statement-I and Statement-II are true.
 (3) Both Statement-I and Statement-II are false (4) Statement-I is false but Statement-II is true
9. Example of vinylic halide is



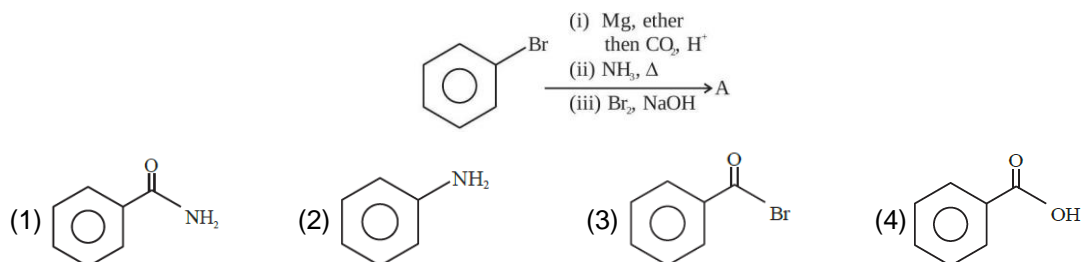
10. Structure of 4-Methylpent-2-enal is



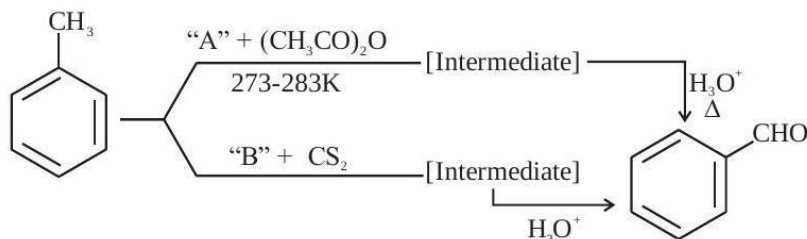
11. Match List-I with List-II

List-I	List-II
Molecule	Shape
(A) BrF_5	(I) T-shape
(B) H_2O	(II) See saw
(C) ClF_3 Shape	(III) Bent
(D) SF_4	(IV) Square pyramidal

- (1) (A)-I, (B)-II, (C)-IV, (D)-III (2) (A) -II, (B)-I, (C)-III, (D)-IV
 (3) (A)-III, (B)-IV, (C)-I, (D)-II (4) (A)-IV, (B)-III, (C)-I, (D)-II
12. The final product A, formed in the following multistep reaction sequence is:



13. In the given reactions identify the reagent A and reagent B



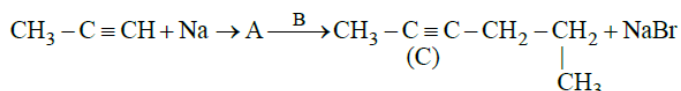
- (1) A – CrO₃ B – CrO₃
 (2) A – CrO₃ B – CrO₂Cl₂
 (3) A – CrO₂Cl₂ B- CrO₂Cl₂
 (4) A – CrO₂Cl₂ B – CrO₃
14. Given below are two statements one is labeled as Assertion (A) and the other is labeled as Reason (R).
Assertion (A): CH₂ = CH – CH₂ – Cl is an example of allyl halide
Reason (R): Allyl halides are the compounds in which the halogen atom is attached to sp² hybridised carbon atom.
 In the light of the two above statements, choose the most appropriate answer from the options given below:
 (1) (A) is true but (R) is false
 (2) Both (A) and (R) are true but (R) is not the correct explanation of (A)
 (3) (A) is false but (R) is true
 (4) Both (A) and (R) are true and (R) is the correct explanation of (A)
15. What happens to freezing point of benzene when small quantity of naphthalene is added to benzene?
 (1) Increases
 (2) Remains unchanged
 (3) First decreases and then increases
 (4) Decreases
16. Match List-I with List-II

List-I	List-II
Species	Electronic Distribution
(A) Cr ⁺²	(I) 3 d ⁸
(B) Mn ⁺	(II) 3 d ³ 4 s ¹
(C) Ni ⁺²	(III) 3d ⁴
(D) V ⁺	(IV) 3d ⁵ 4 s ¹

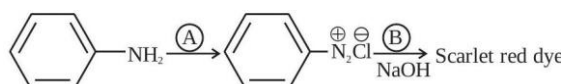
Choose the correct answer from the options given below:

- (1) (A)-I, (B)-II, (C)-III, (D)-IV (2) (A)-III, (B) - IV, (C) - I, (D)-II
 (3) (A)-IV, (B)-III, (C)-I, (D)-II (4) (A)-II, (B)-I, (C)-IV, (D)-III

17. Compound A formed in the following reaction reacts with B gives the product C. Find out A and B.



- (1) A = $\text{CH}_3 - \text{C} \equiv \bar{\text{C}}^+$, B = $\text{CH}_3 - \text{CH}_2 - \text{CH}_2 - \text{Br}$
 (2) A = $\text{CH}_3 - \text{CH} = \text{CH}_2$, B = $\text{CH}_3 - \text{CH}_2 - \text{CH}_2 - \text{Br}$
 (3) A = $\text{CH}_3 - \text{CH}_2 - \text{CH}_3$, B = $\text{CH}_3 - \text{C} \equiv \text{CH}$
 (4) A = $\text{CH}_3 - \text{C} \equiv \bar{\text{C}}^+$, B = $\text{CH}_3 - \text{CH}_2 - \text{CH}_3$
18. Following is a confirmatory test for aromatic primary amines. Identify reagent (A) and (B)



- (1) A = $\text{HNO}_3/\text{H}_2\text{SO}_4$;
 B =

- (2) A = $\text{NaNO}_2 + \text{HCl}, 0 - 5^\circ\text{C}$;
 B =

- (3) A = $\text{NaNO}_2 + \text{HCl}, 0 - 5^\circ\text{C}$;
 B =

- (4) A = $\text{NaNO}_2 + \text{HCl}, 0 - 5^\circ\text{C}$;
 B =

19. The Lassaigne's extract is boiled with dil HNO_3 before testing for halogens because,

- (1) AgCN is soluble in HNO_3
 (2) Silver halides are soluble in HNO_3
 (3) Ag_2S is soluble in HNO_3
 (4) Na_2S and NaCN are decomposed by HNO_3

20. Choose the correct Statements from the following:

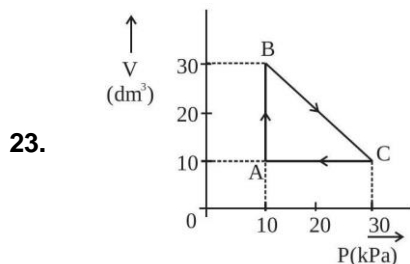
- (A) Ethane-1,2-diamine is a chelating ligand.
 (B) Metallic aluminium is produced by electrolysis of aluminium oxide in presence of cryolite.
 (C) Cyanide ion is used as ligand for leaching of silver.
 (D) Phosphine act as a ligand in Wilkinson catalyst.
 (E) The stability constants of Ca^{2+} and Mg^{2+} are similar with EDTA complexes.

Choose the correct answer from the options given below:

- (1) (B), (C), (E) only
 (2) (C), (D), (E) only
 (3) (A), (B), (C) only
 (4) (A), (D), (E) only

SECTION-B

21. The rate of first order reaction is $0.04 \text{ mol L}^{-1} \text{ s}^{-1}$ at 10 minutes and $0.03 \text{ mol L}^{-1} \text{ s}^{-1}$ at 20 minutes after initiation. Half life of the reaction is _____ minutes. (Given $\log 2 = 0.3010, \log 3 = 0.4771$)
22. The pH at which $\text{Mg}(\text{OH})_2$ [$K_{\text{sp}} = 1 \times 10^{-11}$] begins to precipitate from a solution containing 0.10 M Mg^{2+} ions is _____



- An ideal gas undergoes a cyclic transformation starting from the point A and coming back to the same point by tracing the path $A \rightarrow B \rightarrow C \rightarrow A$ as shown in the diagram. The total work done in the process is _____ J.
24. If IUPAC name of an element is "Unununnium" then the element belongs to nth group of periodic table. The value of n is _____
25. The total number of molecular orbitals formed from $2s$ and $2p$ atomic orbitals of a diatomic molecule _____
26. On a thin layer chromatographic plate, an organic compound moved by 3.5 cm , while the solvent moved by 5 cm . The retardation factor of the organic compound is _____ $\times 10^{-1}$
27. The compound formed by the reaction of ethanal with semicarbazide contains _____ number of nitrogen atoms.
28. 0.05 cm thick coating of silver is deposited on a plate of 0.05 m^2 area. The number of silver atoms deposited on plate are _____ $\times 10^{23}$. (At mass $\text{Ag} = 108, d = 7.9 \text{ g cm}^{-3}$)
29. $2\text{MnO}_4^- + b\text{I}^- + c\text{H}_2\text{O} \rightarrow x\text{I}_2 + y\text{MnO}_2 + z\text{OH}^-$
If the above equation is balanced with integer coefficients, the value of z is _____.
30. The mass of sodium acetate (CH_3COONa) required to prepare 250 mL of 0.35 M aqueous solution is _____ g. (Molar mass of CH_3COONa is 82.02 g mol^{-1})

Ans. (7)

NTA ANSWERS

- | | | | | | | |
|----------|-----------|----------|----------|----------|----------|----------|
| 1. (3) | 2. (1) | 3. (1) | 4. (2) | 5. (1) | 6. (2) | 7. (1) |
| 8. (1) | 9. (1) | 10. (4) | 11. (4) | 12. (2) | 13. (2) | 14. (1) |
| 15. (4) | 16. (2) | 17. (1) | 18. (4) | 19. (4) | 20. (3) | 21. (24) |
| 22. (09) | 23. (200) | 24. (11) | 25. (08) | 26. (07) | 27. (03) | 28. (11) |
| 29. (08) | 30. (7) | | | | | |